




Name _____

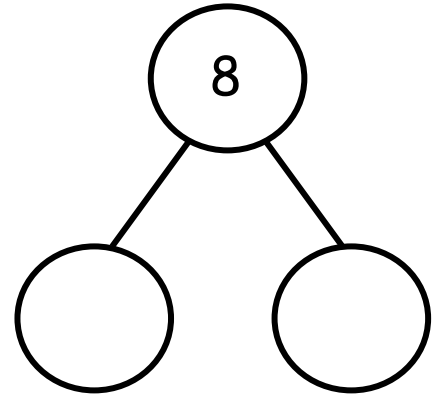
Date _____

Fill in the number sentences and number bonds.


Put an X on 3 dots.



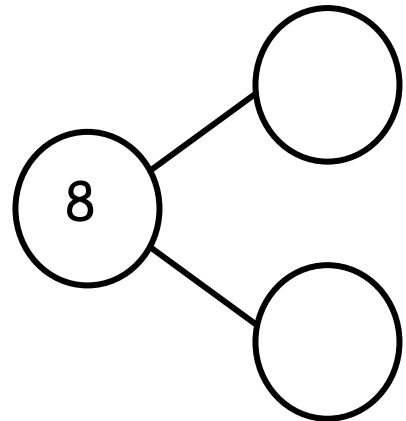
$$\boxed{8} - \boxed{} = \boxed{}$$




Put an X on 5 dots.



$$\boxed{} - \boxed{} = \boxed{}$$



Put an X on some dots.



$$\boxed{} - \boxed{} = \boxed{}$$

